

GEOMETRY AND GROUPS – Example Sheet 1

TKC Michaelmas 2012

- Use the orbit – stabilizer theorem to compute the size of the symmetry group of a cube. Describe each of the symmetries in this group. Show that the orbit $\text{Orb}(x)$, for x any point in \mathbb{E}^3 , usually contains as many points as the symmetry group. Find all of the points for which this is untrue.
- Show that additive the group $\mathbb{Z} \times \mathbb{Z}$ acts on the plane \mathbb{R}^2 by

$$\begin{pmatrix} n_1 \\ n_2 \end{pmatrix} \cdot \begin{pmatrix} x_1 \\ x_2 \end{pmatrix} = \begin{pmatrix} x_1 + n_1 \\ x_2 + n_2 \end{pmatrix}$$

and that the unit square $S = \left\{ \begin{pmatrix} x_1 \\ x_2 \end{pmatrix} : 0 \leq x_1 < 1 \text{ and } 0 \leq x_2 < 1 \right\}$ is a fundamental set. Hence show that we can identify the quotient $\mathbb{R}^2/\mathbb{Z} \times \mathbb{Z}$ with a torus.

Let $\mathbf{u} = \begin{pmatrix} a \\ c \end{pmatrix}$, $\mathbf{v} = \begin{pmatrix} b \\ d \end{pmatrix}$ for some integers a, b, c, d with $ad - bc = \pm 1$. Show that every vector $\mathbf{w} \in \mathbb{Z} \times \mathbb{Z}$ can be written as $m\mathbf{u} + n\mathbf{v}$ for some integers m and n . Deduce that the parallelogram

$$\{\lambda\mathbf{u} + \mu\mathbf{v} : 0 \leq \lambda < 1 \text{ and } 0 \leq \mu < 1\} .$$

is also a fundamental set for the group action.

- Consider the two maps:

$$A : \begin{pmatrix} x_1 \\ x_2 \end{pmatrix} \mapsto \begin{pmatrix} x_1 \\ x_2 + 1 \end{pmatrix} ; \quad B : \begin{pmatrix} x_1 \\ x_2 \end{pmatrix} \mapsto \begin{pmatrix} x_1 + 1 \\ -x_2 \end{pmatrix}$$

acting on the plane \mathbb{R}^2 . Let G be the group they generate. Is G Abelian? Find the orbit of a point x under this group. Find a fundamental set and hence describe the quotient \mathbb{R}^2/G .

- Show that there are two ways to embed a regular tetrahedron in cube C so that the vertices of the tetrahedron are also vertices of C . Show that the symmetry group of C permutes these tetrahedra and deduce that the symmetry group of C is isomorphic to the Cartesian product $S_4 \times C_2$ of the symmetric group S_4 and the cyclic group C_2 .
- Show that two rotations are conjugate in $\text{Isom}^+(\mathbb{E}^2)$ if and only if they are both rotations through the same angle. When are they conjugate in $\text{Isom}(\mathbb{E}^2)$?



Describe all of the conjugacy classes of $\text{Isom}^+(\mathbb{E}^2)$ and of $\text{Isom}(\mathbb{E}^2)$.

Let \mathcal{C} be the conjugacy class in $\text{Isom}(\mathbb{E}^2)$ of the reflection M in a line ℓ . Show that $\text{Isom}(\mathbb{E}^2)$ acts on \mathcal{C} by

$$(A, R) \mapsto A \circ R \circ A^{-1} .$$

Identify the stabilizer of M . How is this related to the stabilizer of another element $A \circ M \circ A^{-1}$ of \mathcal{C} ?

- Describe all of the symmetries of the two patterns below. (Both patterns are continued indefinitely in each direction.)



- Prove Proposition 2.4 classifying the isometries of Euclidean space \mathbb{E}^3 .

8. (Every finite group is a symmetry group.)

Let G be any finite group and let R be the set of all functions $\phi : G \rightarrow \mathbb{R}$. Show that R is a finite dimensional real vector space. Show that the group G acts on R via

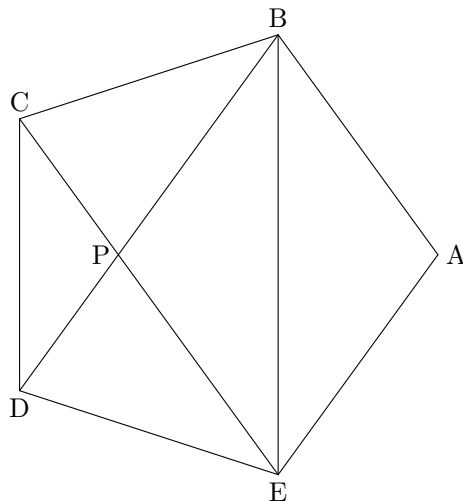
$$(g, \phi) \mapsto g \cdot \phi \quad \text{where} \quad g \cdot \phi : h \mapsto \phi(g^{-1}h).$$

Find an inner product on R that makes the functions

$$\varepsilon_g : h \mapsto \begin{cases} 1 & \text{when } h = g; \\ 0 & \text{otherwise.} \end{cases}$$

into an orthonormal basis for R . Show that each element of G then acts as an orthogonal linear map on R .

9. The number $\tau = \frac{1}{2}(1 + \sqrt{5})$ is called the *Golden ratio*. Show that it satisfies $\tau^2 = \tau + 1$.



In the diagram above, $ABCDE$ is a regular pentagon. Show that the triangles ABE , PEB and PCD are similar. Deduce that the diagonal BE has length τ times the side length for the pentagon.

10. Take two regular pentagons with sides of length 2 and cut them along a diagonal joining two non-adjacent vertices. Show that the four pieces can be fitted together to form a tent over a square with side length 2τ . Show that the height of the tent is then 1. Attach six of these tents to the faces of a cube and hence show that the twenty points

$$(0, \pm 1, \pm \tau^2), (\pm 1, \pm \tau^2, 0), (\pm \tau^2, 0, \pm 1), (\pm \tau, \pm \tau, \pm \tau)$$

are the vertices of a regular dodecahedron.

Note that the cube is inscribed inside the dodecahedron. How many such inscribed cubes are there?

11. Let s_n , $n \geq 3$, be the side length of a regular n -gon P_n inscribed inside the unit circle. Show that $s_{2n} = \sqrt{2 - \sqrt{4 - s_n^2}}$. Deduce that

$$s_{2n} = \sqrt{2 - \sqrt{2 + \sqrt{2 + \dots + \sqrt{2}}}}$$

Let A_n be the area of P_n . Show that

$$A_{2n+1} = 2^{n-1} s_{2n}$$

and deduce that

$$\pi = \lim_{n \rightarrow \infty} 2^n \sqrt{2 - \sqrt{2 + \sqrt{2 + \sqrt{2 + \dots + \sqrt{2}}}}}$$

where there are n nested square roots in the limit.

Please send any comments or corrections to me at: t.k.carne@dpmmms.cam.ac.uk.